

CHEMISTRY 101
Hour Exam I
February 14, 2023
McCarren

Name _____

Signature _____

Section _____

“Curiosity is one of the great secrets of happiness.” – Bryant H. McGill

This exam contains 17 questions on 9 numbered pages. Check now to make sure you have a complete exam. You have one hour and thirty minutes to complete the exam. Determine the best answer to the first 15 questions and enter these on the special answer sheet. Also, circle your responses in this exam booklet. Show all of your work and provide complete answers to questions 16 and 17.

1-15	(30 pts.)	_____
16	(14 pts.)	_____
17	(16 pts.)	_____
Total	(60 pts)	_____

Useful Information:

$$PV = nRT$$

$$K = ^\circ C + 273$$

$$R = 0.08206 \text{ L}\cdot\text{atm}/\text{mol}\cdot\text{K} \approx 0.0821 \text{ L}\cdot\text{atm}/\text{mol}\cdot\text{K}$$

$$\text{Density} = \text{mass} / \text{volume}$$

$$\text{Avogadro's number} = 6.022 \times 10^{23}$$

$$1 \text{ L} = 1000 \text{ mL}$$

$$1 \text{ atm} = 760. \text{ torr}$$

Assume atmospheric pressure is 1.00 atm (unless explicitly told otherwise).

Always assume ideal behavior for gases (unless explicitly told otherwise).

Part 1: Multiple Choice

1. You are driving on the highway at a speed of 70.0 miles per hour. How many feet do you move each second? (1 mile = 5280 feet, 1 hour = 60 minutes, 1 minute = 60 seconds)
 - a. 47.7 feet
 - b. 70.0 feet
 - c. 103 feet
 - d. 6,160 feet
 - e. 3.68×10^{-6} feet

2. You have a sample of 1.00 mole of water. How do the number of atoms and molecules in this sample compare? Choose the option below which best completes the sentence.

The number of atoms in one mole of water is _____ the number of molecules in one mole of water.

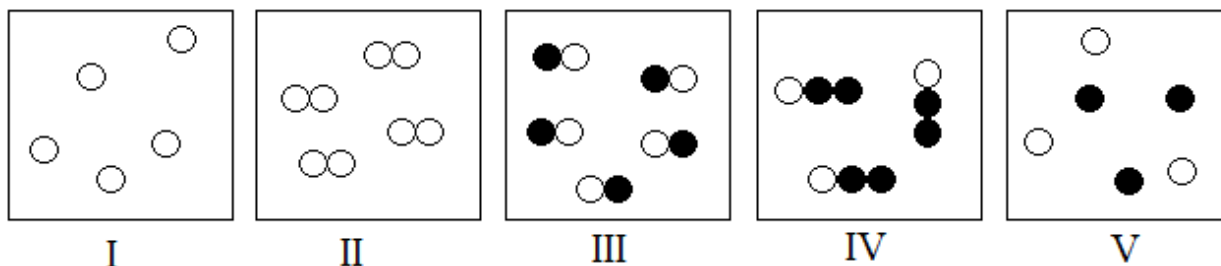
- a. one-third
 - b. half
 - c. the same as
 - d. twice
 - e. three times
3. How many moles of calcium hydroxide is 100. grams calcium hydroxide?
 - a. 1.35 moles
 - b. 1.72 moles
 - c. 1.78 moles
 - d. 5,810 moles
 - e. 7,410 moles
4. What is the percent composition of iron in a compound of iron(III) phosphate?
 - a. 37.2%
 - b. 41.4%
 - c. 63.8%
 - d. 64.3%
 - e. 84.4%
5. A compound consists of one or more ions of X as well a single sulfate anion. The molar mass of this compound is 174.26 g/mol. What is the identity of X?
 - a. Hydrogen
 - b. Lithium
 - c. Bromine
 - d. Potassium
 - e. Strontium

6. Each of the compounds below contains at least one atom of oxygen. For how many of the compounds are the names are written correctly for the formulas given below?

Formula	Name
CaO	calcium oxide
K ₂ O	potassium oxide
N ₂ O	dinitrogen oxide
MgO	magnesium monoxide
N ₂ O ₄	dinitrogen tetroxide

- 1 (Only one compound is named correctly.)
- 2
- 3
- 4
- 5 (All five compounds are named correctly.)

The diagrams below show images which represent substances. Consider each circle to represent an atom of a particular element, with circles of different colors representing different elements. Use the diagram to answer the next two questions.



7. Which two of the images represent substances which are compounds?
- I and II
 - II and III
 - IV and V
 - III and IV
 - III and V
8. Which of the images represents a mixture?
- I
 - II
 - III
 - IV
 - V

9. You have two different ions of the element cobalt. Which is **false** about these ions?
- The two ions may have different numbers of neutrons.
 - The two ions may have different numbers of protons.
 - The two ions may have different numbers of electrons.
 - None of these (a-c) are false regarding these ions; all three statements are true.
 - All of these (a-c) are false regarding these ions.
10. Suppose that during your lab class, you calculated that a penny contains 2.80×10^{22} atoms of copper. What was the mass of copper in the penny?
- 0.0465 g
 - 1.78 g
 - 2.95 g
 - 3.70 g
 - 2.95×10^{46} g
11. A 50.0 g sample of helium gas is present at a pressure of 1.0 atm and a temperature of 296 K. What is the volume of this gas sample?
- 1,210 L
 - 304 L
 - 22.6 L
 - 1.60 L
 - 0.400 L
12. You have a mixture of two gases in a rigid container consisting of 80.0 g of neon and 80.0 g argon. How does the partial pressure of the neon compare to the total pressure in the container? Select the option below which best completes the sentence.

The partial pressure of neon is approximately _____ the total pressure in the container.

- one-quarter
- one-third
- half
- two-thirds
- three-quarters

13. Kinetic molecular theory involves making several assumptions about how ideal gases behave compared to real gases. How does a real gas behave differently from an ideal gas?

Particles of real gases differ from ideal gases, because only real gas particles...

- a. are able to attract one another.
- b. exert pressure.
- c. change speed with temperature.
- d. are always in motion.
- e. can be diatomic.

You have three samples of gas, each present in rigid containers of equal volume which are all at the same temperature. The table below shows the makeup of each sample.

Sample 1	Sample 2	Sample 3
1.5 moles helium gas	1.0 mole oxygen gas	1.0 mole neon gas

Use this information regarding these samples to answer the next two questions.

14. How do the masses of these gases compare? Select the choice which correctly ranks the samples from least to greatest **mass** of gas. If any of the masses are equal, select the choice which states this.
- a. Sample 1 < Sample 2 < Sample 3
 - b. Sample 3 < Sample 1 < Sample 2
 - c. Sample 1 < Sample 3 < Sample 2
 - d. Sample 3 < Sample 2 < Sample 1
 - e. Sample 2 = Sample 3 < Sample 1
15. Rank the gas samples from least to greatest **pressure** of gas. If any of the gases have the same pressures, select the choice which states this.
- a. Sample 1 < Sample 2 < Sample 3
 - b. Sample 2 = Sample 3 < Sample 1
 - c. Sample 3 < Sample 1 < Sample 2
 - d. Sample 1 < Sample 3 < Sample 2
 - e. Sample 3 < Sample 2 < Sample 1

16. This problem includes two compounds: one ionic, and one non-ionic. For each compound, be sure to answer all questions and show your work in the space below.

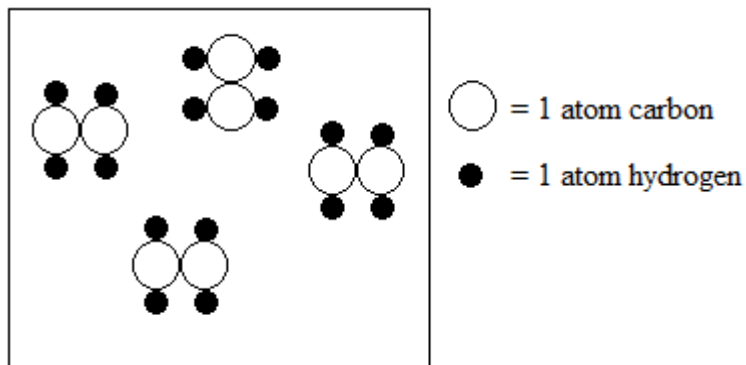
a. Find the empirical formula of this compound. Show all work in the space below.

b. Because this compound is ionic, the empirical formula of this compound is also the molecular formula. What is the name of the compound which has the formula you found in part a.?

c. The name of the compound you gave in part b. should have included Roman numerals. What do Roman numerals represent when naming compounds? Also, explain why you chose the value that you did for the Roman numerals.

Please go on to the next page.

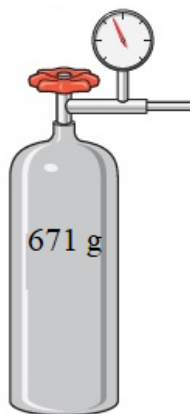
Compound 2: Consider the diagram below which shows a compound consisting of both carbon and hydrogen.



- d. Give the empirical and molecular formulas for this compound in the space below. Be sure to label which is the empirical formula and which is the molecular formula.
- e. Your friend incorrectly tells you that the molecular formula for this compound is C_8H_{16} . Explain their error to them and show them how to get the actual molecular formula using the information provided in the diagram.

Please go on to the next page.

17. The rigid 50.0 L steel tank below contains 671 g of an unknown **monatomic** gas. The gas is at a temperature of 25.0°C and a pressure of 2.50 atm. Use this information to answer the following questions.



- a. What is the identity of the gas in the container? Show your work in the space below.
- b. It is possible to increase the pressure in the container by adding neon gas to the tank. Assuming that adding the neon gas did not influence the temperature, explain why this increases the pressure, making sure you include whether moles of gas and volume are constant or changing during this process. Be sure that your explanation addresses particle behavior.

Please go on to the next page.

- c. What **mass** of neon gas would need to be added to the original 50.0 L container to double the pressure from 2.50 atm to 5.0 atm? Assume that adding the neon gas did not influence the temperature. Show your work.
- d. Another way to increase pressure the of gas in the tank is to increase the temperature. Consider the original 50.0 L tank, consisting only of the 671 g of monatomic gas at 25.0°C and a pressure of 2.50 atm. To what temperature (in degrees Celsius) would you need to heat the gas in order to double the pressure in the tank to 5.0 atm?

A black octagonal sign with a white border and the word "STOP." in bold black capital letters.

You have reached the end of the exam. Nothing written after this page will be graded.

Chem 101 Scratch Paper

NOTHING WRITTEN ON THIS PAGE WILL BE GRADED

Periodic Table of the Elements

1A	1 H Hydrogen 1.008	2A	3A	4A	5A	6A	7A	8A
1								1 He Helium 4.003
2	3 Li Lithium 6.941	4 Be Beryllium 9.012		6 C Carbon 12.01	7 N Nitrogen 14.01	8 O Oxygen 16.00	9 F Fluorine 19.00	10 Ne Neon 20.18
3	11 Na Sodium 22.99	12 Mg Magnesium 24.31		14 Si Silicon 28.09	15 P Phosphorus 30.97	16 S Sulfur 32.07	17 Cl Chlorine 35.45	18 Ar Argon 39.95
4	19 K Potassium 39.10	20 Ca Calcium 40.08	3B	31 Ga Gallium 69.72	32 Ge Germanium 72.59	33 As Arsenic 74.92	34 Se Selenium 78.96	35 Br Bromine 79.90
5	37 Rb Rubidium 85.47	38 Sr Strontium 87.62	4B	49 In Indium 114.8	50 Sn Tin 118.7	51 Sb Antimony 121.8	52 Te Tellurium 127.6	53 I Iodine 126.9
6	55 Cs Cesium 132.90	56 Ba Barium 137.3	5B	81 Tl Thallium 204.4	82 Pb Lead 207.2	83 Bi Bismuth 209.0	84 Po Polonium (209)	85 At Astatine (210)
7	87 Fr Francium (223)	88 Ra Radium 226	6B				116 — (289)	
			7B					
			8B					
			8B					
			8B					
			9B					
			10B					
			11B					
			12B					
			13B					
			14B					
			15B					
			16B					
			17B					
			18B					
			19B					
			20B					
			21B					
			22B					
			23B					
			24B					
			25B					
			26B					
			27B					
			28B					
			29B					
			30B					
			31B					
			32B					
			33B					
			34B					
			35B					
			36B					
			37B					
			38B					
			39B					
			40B					
			41B					
			42B					
			43B					
			44B					
			45B					
			46B					
			47B					
			48B					
			49B					
			50B					
			51B					
			52B					
			53B					
			54B					
			55B					
			56B					
			57B					
			58B					
			59B					
			60B					
			61B					
			62B					
			63B					
			64B					
			65B					
			66B					
			67B					
			68B					
			69B					
			70B					
			71B					
			72B					
			73B					
			74B					
			75B					
			76B					
			77B					
			78B					
			79B					
			80B					
			81B					
			82B					
			83B					
			84B					
			85B					
			86B					
			87B					
			88B					
			89B					
			90B					
			91B					
			92B					
			93B					
			94B					
			95B					
			96B					
			97B					
			98B					
			99B					
			100B					
			101B					
			102B					
			103B					
			104B					
			105B					
			106B					
			107B					
			108B					
			109B					
			110B					
			111B					
			112B					
			113B					
			114B					
			115B					
			116B					
			117B					
			118B					
			119B					
			120B					
			121B					
			122B					
			123B					
			124B					
			125B					
			126B					
			127B					
			128B					
			129B					
			130B					
			131B					
			132B					
			133B					
			134B					
			135B					
			136B					
			137B					
			138B					
			139B					
			140B					
			141B					
			142B					
			143B					
			144B					
			145B					
			146B					
			147B					
			148B					
			149B					
			150B					
			151B					
			152B					
			153B					
			154B					
			155B					
			156B					
			157B					
			158B					
			159B					
			160B					
			161B					
			162B					
			163B					
			164B					
			165B					
			166B					
			167B					
			168B					
			169B					
			170B					
			171B					
			172B					
			173B					
			174B					
			175B					
			176B					
			177B					
			178B					
			179B					
			180B					
			181B					
			182B					
			183B					
			184B					
			185B					
			186B					
			187B					
			188B					
			189B					
			190B					
			191B					
			192B					
			193B					
			194B					
			195B					
			196B					
			197B					
			198B					
			199B					
			200B					
			201B					
			202B					
			203B					
			204B					
			205B					
			206B					
			207B					
			208B					
			209B					
			210B					
			211B					
			212B					
			213B					
			214B					
			215B					
			216B					
			217B					
			218B					
			219B					
			220B					
			221B					
			222B					
			223B					
			224B					
			225B					
			226B					
			227B					
			228B					
			229B					
			230B					
			231B					
			232B					
			233B					
			234B					
			235B					
			236B					
			237B					
			238B					
			239B					
			240B					
			241B					
			242B					
			243B					
			244B					
			245B					
			246B					
			247B					
			248B					
			249B					
			250B					
			251B					
			252B					
			253B</					